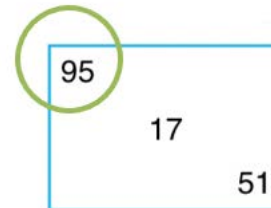


LE TRIPLETTE

In ogni riquadro, individua il numero più grande.

Per esempio, da 1 a 100:



Credit: generatore di triplete realizzato da Antonio Milanese - trainingcognitivo.it

LE TRIPLETTE

In ogni riquadro, individua il numero più alto **da 1 a 100**

95
17
51

56
94
33

5
100
75

21
33
24

19
27
55

41
96
63

89
21
94

44
7
69

100
40
48

13
61
58

60
99
52

39
63
5

88
36
85

41
13
80

92
9
83

LE TRIPLETTE

In ogni riquadro, individua il numero più alto **da 1 a 100**

22
45
31

94
35
14

2
31
83

56
81
67

34
5
15

1
47
29

62
71
84

16
100
11

80
46
60

34
50
5

3
100
88

48
99
51

64
10
53

66
11
14

67
76
93

LE TRIPLETTE

In ogni riquadro, individua il numero più alto **da 1 a 100**

88
56
78

71
38
11

64
13
43

62
96
30

42
44
84

17
1
61

41
69
87

81
56
83

62
72
85

74
54
26

62
63
55

47
9
23



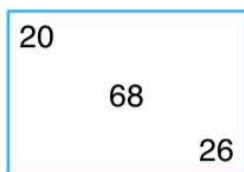


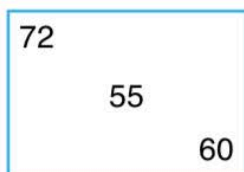



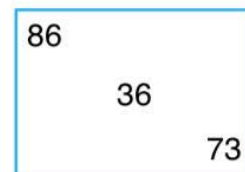
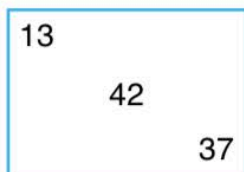


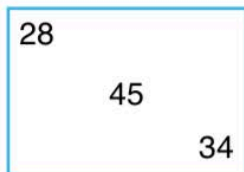
28
72
36

77
70
87

26
32
6

LE TRIPLETTE

In ogni riquadro, individua il numero più alto **da 1 a 100**



LE TRIPLETTE

In ogni riquadro, individua il numero più alto **da 1 a 1000**

498
915
439

245
366
862

135
462
751

167
504
543

536
504
298

624
507
566

751
81
806

849
46
802

315
104
221

404
675
57

478
683
459

48
279
153

550
954
255

69
63
659

527
664
339

LE TRIPLETTE

In ogni riquadro, individua il numero più alto **da 1 a 1000**

389
914
311

665
512
304

894
84
161

700
267
116

125
652
478

198
774
392

648
763
48

608
790
578

178
696
311

394
995
87

396
673
16

588
498
672

519
595
159

317
851
797

496
394
190

LE TRIPLETTE

In ogni riquadro, individua il numero più alto **da 1 a 1000**

581
648
742

999
741
254

749
722
594

114
88
760

956
213
539

452
434
173

845
72
418

420
557
219

373
559
769

362
867
58

688
419
546

950
174
681

10
858
230

459
863
169

410
359
189

LE TRIPLETTE

In ogni riquadro, individua il numero più alto **da 1 a 1000**

500
723
532

166
836
989

123
582
966

311
388
419

318
296
835

610
22
68

12
32
693

892
753
984

671
499
166

852
464
69

131
53
442

598
516
346

293
562
404

371
885
431

323
811
775

LE TRIPLETTE

In ogni riquadro, individua il numero più alto **da 1 a 1000**

577
716
928

805
334
946

684
408
254

29
313
100

2
197
3

565
396
953

546
918
984

505
897
993

230
696
383

471
233
402

476
843
480

936
255
112

324
687
60

857
488
621

620
597
825

LE TRIPLETTE

In ogni riquadro, individua il numero più alto **da 1 a 1000**

282
945
242

395
275
618

924
645
121

622
590
374

427
58
390

405
979
75

485
721
695

407
584
359

781
861
544

899
693
349

236
466
716

64
771
748

743
122
878

237
18
593

428
524
44

LE TRIPLETTE

In ogni riquadro, individua il numero più alto **da 1 a 10000**

962
1288
4254

611
9331
570

2918
6856
898

1954
5157
5118

8247
1536
2128

8660
1852
4783

3257
4113
9949

6331
6162
9008

3391
7314
3234

3416
2364
4452

2784
6758
692

1510
6787
6693

1030
5534
62

1810
9697
8118

4766
1850
3803

LE TRIPLETTE

In ogni riquadro, individua il numero più alto **da 1 a 10000**

278
1945
2549

6832
4067
4905

1396
5081
5178

2178
2328
7486

8862
1946
1643

4064
2337
1331

273
9053
1429

6206
8760
443

5947
1743
2120

9577
1086
8904

1895
2690
2203

7783
2031
9912

8286
5987
6729

8752
4213
3592

532
8691
331

LE TRIPLETTE

In ogni riquadro, individua il numero più alto **da 1 a 10000**

428
7961
6328

3666
5875
7753

6791
3890
3904

2064
4482
9370

491
2637
1822

5412
3188
9771

5129
6413
1372

937
9129
4070

3866
446
778

193
3159
303

7946
3621
3117

7888
7676
9350

9357
1989
7325

1280
4341
1831

2724
2968
3969

LE TRIPLETTE

In ogni riquadro, individua il numero più alto **da 1 a 10000**

8204
77
1960

9181
9004
8480

2085
2163
668

6198
7006
6848

9185
905
4893

3306
3559
7912

2780
1296
9507

5014
9270
6719

4180
2693
922

7837
543
9920

3895
152
2596

2832
5384
7267

9755
4994
590

7797
956
1737

4101
9351
3005